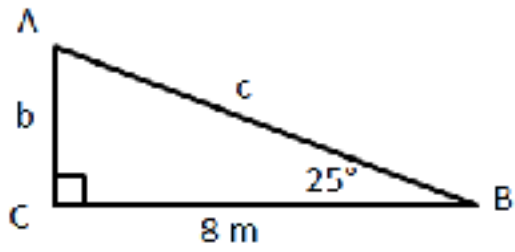
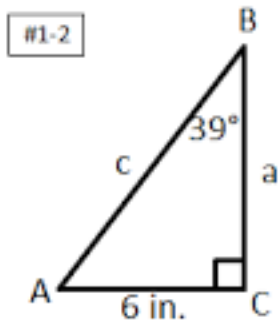


name _____

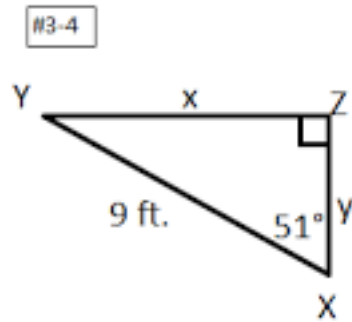


SOLVE ALL THE TRIANGLES

- use SOHCAHTOA
- find all angles
- find all side lengths
- SHOW ALL WORK!



#1-2



#3-4

